

Practical Guide Biology Enzymes

This document contains:

- Links to YouTube clips showing the practical procedure
- Information from examination boards AQA, OCR, Edexcel
- Potential examination questions and answers

This resource is strictly for the use of member schools for as long as they remain members of The PiXL Club. It may not be copied, sold nor transferred to a third party or used by the school after membership ceases. Until such time it may be freely used within the member school.

All opinions and contributions are those of the authors. The contents of this resource are not connected with nor endorsed by any other company, organisation or institution.

Commissioned by The PiXL Club Ltd. November 2016

- **AQA**


Required practical activity	Apparatus and techniques
<p>Investigate the effect of pH on the rate of reaction of amylase enzyme.</p> <p>Students should use a continuous sampling technique to determine the time taken to completely digest a starch solution at a range of pH values. Iodine reagent is to be used to test for starch every 30 seconds.</p> <p>Temperature must be controlled by use of a water bath or immersible electric heater.</p>	<p>AT 1, AT 2, AT 5, AT 8</p>

- **Edexcel**

1.10	<i>Investigate the effect of pH on enzyme activity</i>	<p>For this core practical students will investigate the effect of pH, however other variables can also be investigated to enhance practical work in this area. This method uses amylase (in solutions of different pH) to break down starch. The reaction can be monitored by using iodine to test the presence of starch in the solution with a continuous sampling method. To maintain the temperature of the solution, a Bunsen burner and water beaker must be used.</p>
------	--	---

- **OCR PAG 4: Rates of enzyme-controlled reactions**

Investigate the factors that can affect the rate of enzyme activity.



Video 1

Video 2

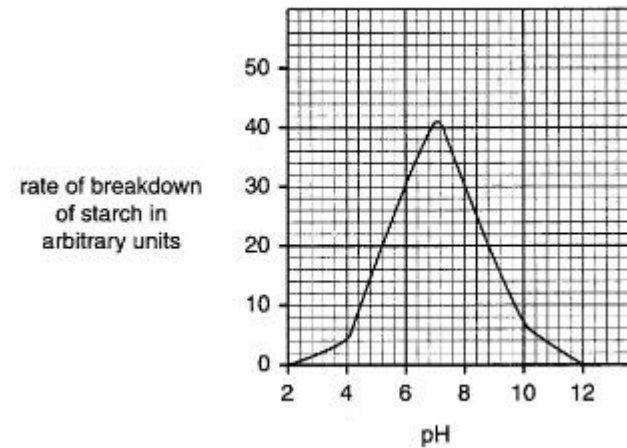
Image from: <http://www.nuffieldfoundation.org/practical-biology/investigating-effect-ph-amylase-activity>

1. Plot a graph of this data:

pH	2	4	6	7	9	10	12
Rate of breakdown of starch by amylase/ arbitrary units	0	4	30	41	14	6	0

2. Use the graph to identify the optimum pH for amylase.
3. Describe how the rate of breakdown of starch changes as the pH increases.
4. Describe how you would monitor the reaction to identify when all the starch had been broken down.
5. Explain why there is a value of 0 for pH 2 and 12.

1. Plot a graph of this data.



ANS:

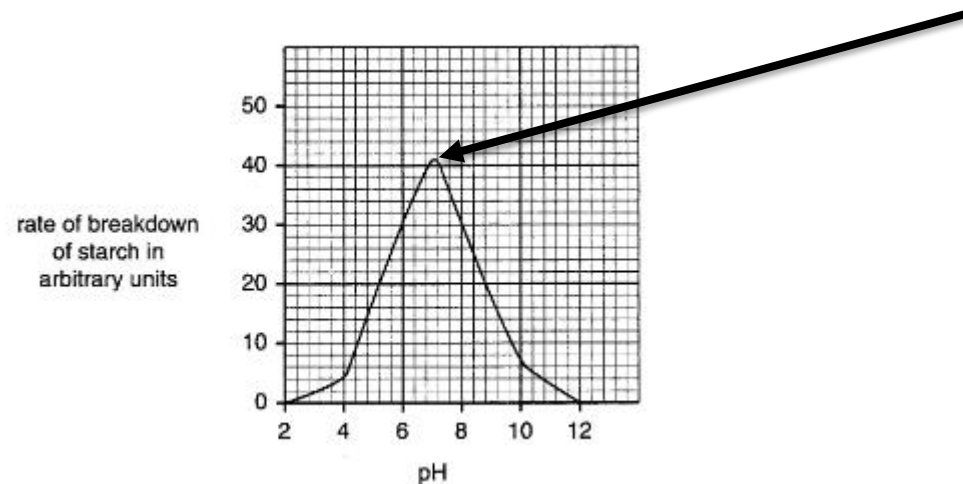
- **Appropriate scales**
- **Labels on axes**
- **Points plotted correctly**

2. Use the graph to identify the optimum pH for amylase.

ANS:

pH 7

Fastest rate of breakdown of starch



3. Describe how the rate of breakdown of starch changes as the pH increases.

ANS:

- **Increasing pH increases the rate of reaction up to the optimum pH of 7**
- **After the optimum – as the pH increases the rate of reaction decreases**

4. Describe how you would monitor the reaction to identify when all the starch had been broken down.

ANS:

- **Remove small samples from the reaction over time**
- **Test with iodine**
- **Turns blue/ black in presence of starch**
- **Orange/ brown when no starch present**

5. Explain why there is a value of 0 for pH 2 and 12.

ANS:

- **Enzymes are proteins**
- **Denatured**
- **Substrate no longer fits in the active site**

- Why is iodine solution used?
- Why are syringes used to measure the volumes of the solutions?
- Why does the mixture need to be stirred?
- Why are the solutions added in the order stated? (amylase solution, pH solution and starch solution)
- Why is the timer started after the starch solution is added?
- Why must the syringes be used in the same solutions when the investigation is repeated?
- What are the main errors in this procedure?
- How can you improve the procedure?
- What other factors could have affected the results?
- How is the rate of reaction being measured?
- What safety precautions are used in the practical?

A summary document is also available on Huddle which contains all the relevant information about this practical from the different examination boards. This document includes practical methods and other potential examination questions